

Practice 8-4

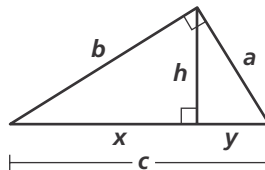
Similarity in Right Triangles

Algebra Find the geometric mean of each pair of numbers.

1. 32 and 8
2. 4 and 16
3. 11 and 7
4. 2 and 22
5. 10 and 20
6. 6 and 30

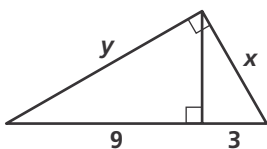
Algebra Refer to the figure to complete each proportion.

7. $\frac{x}{h} = \frac{?}{y}$
8. $\frac{a}{b} = \frac{?}{h}$
9. $\frac{a}{b} = \frac{h}{?}$
10. $\frac{a}{c} = \frac{y}{?}$
11. $\frac{a}{c} = \frac{h}{?}$
12. $\frac{b}{x} = \frac{?}{b}$

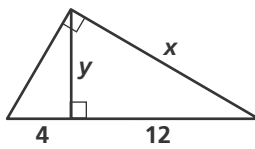


Algebra Find the values of the variables.

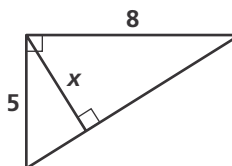
13.



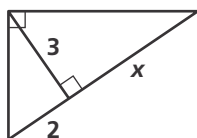
14.



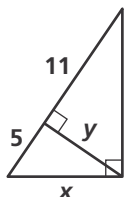
15.



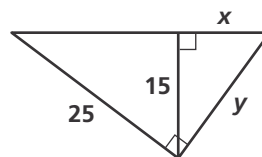
16.



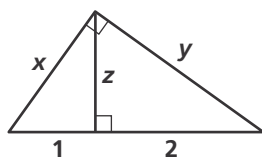
17.



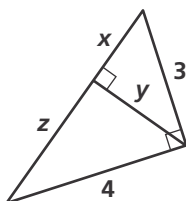
18.



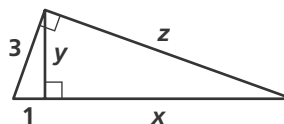
19.



20.



21.



22. The altitude to the hypotenuse of a right triangle divides the hypotenuse into segments 6 in. and 10 in. long. Find the length h of the altitude.